

--	--	--	--	--	--	--	--	--	--

Seventh Semester B.E./B.Tech. Degree Examination, June/July 2025

Control Engineering

Time: 3 hrs.

Max. Marks: 100

Note: Answer any FIVE full questions, choosing ONE full question from each module.

Module-1

- 1 a. Explain open loop and closed loop system with block diagram and examples. (10 Marks)
- b. Explain : (i) Proportional control action. (10 Marks)
- (ii) Differential control action.

OR

- 2 a. Define control system. Explain basic terminologies involved in developing it. (08 Marks)
- b. Find the transfer function $\frac{X_2(s)}{F(s)}$ for the given mechanical system. Refer Fig.Q2 (b).

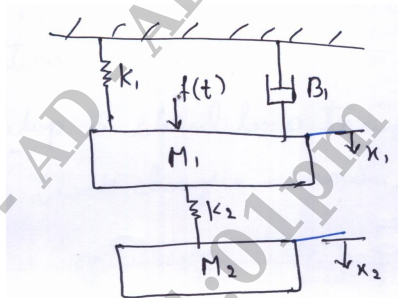


Fig. Q2 (b)

(12 Marks)

Module-2

- 3 a. List and explain standard Test Inputs used in control system analysis. (10 Marks)
- b. Explain 1st order system subjected to unit step input. (10 Marks)

OR

- 4 a. Examine a 2nd order under damped system subjected to unit step input. (10 Marks)
- b. Identify the following quantities for 2nd order unit feedback system with open loop transfer

function $G(s)H(s) = \frac{361}{s^2 + 16s + 361}$. Find

- (i) Damping ratio
- (ii) Natural frequency
- (iii) Settling time
- (iv) Peak time
- (v) Peak over shoot.

(10 Marks)

Module-3

- 5 a. List and explain rules of block diagram reduction technique. (10 Marks)
 b. Develop a closed loop transfer function for the block diagram shown in Fig. Q5 (b).

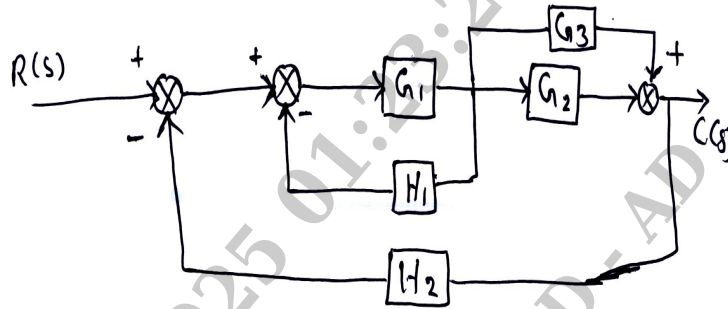


Fig. Q5 (b)

(10 Marks)

OR

- 6 a. For the system shown in Fig. Q6 (a). Examine $\frac{C(s)}{R(s)}$ using Mason's gain formula.

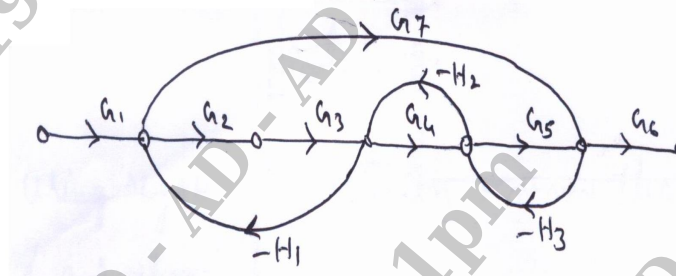


Fig. Q6 (a)

(10 Marks)

- b. For the system shown in Fig. Q6 (b), determine $\frac{C(s)}{R(s)}$ using Mason's gain formula.

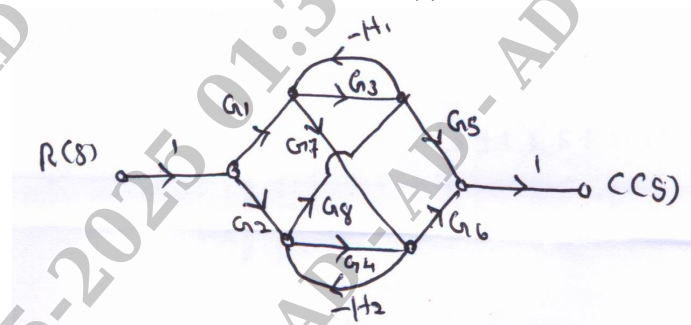


Fig. Q6 (b)

(10 Marks)

Module-4

- 7 a. A system oscillates with a frequency 'w' if it has poles at $s = \pm j\omega$ and no poles in the right half of the s-plane. Determine the values of 'K' and 'a' so that the system shown in Fig. Q7 (a) below, oscillates at a frequency of 2 rad/sec.

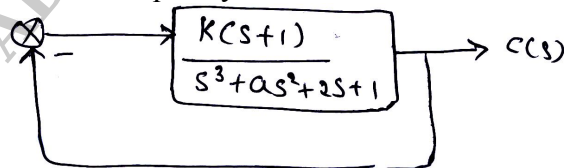


Fig. Q7 (a)

(10 Marks)

- b. The open loop T.F of a unit F.B control system is given by,

$$G(s) = \frac{K}{(s+2)(s+4)(s^2+6s+2s)}.$$

Determine the range of values of K for system stability. What is the value of K which gives sustained oscillations? What is the oscillation frequency? (10 Marks)

OR

- 8 Construct a root locus for all values of 'K' ranging from 0 to ∞ for a feedback control system characterized by,

$$G(s)H(s) = \frac{K}{s(s+1)(s+2)(s+3)}.$$
 (20 Marks)

Module-5

- 9 Using Nyquist criterion, examine the stability of a system whose open loop transfer function

$$\text{is, } G(s)H(s) = \frac{K}{(s+1)(s+2)}.$$
 (20 Marks)

OR

- 10 Construct a Bode plot for the following transfer function and determine gain margin and phase margin.

$$G(s)H(s) = \frac{50}{s(0.5s+1)(0.05s+1)}.$$
 (20 Marks)

* * * * *